

Questions are for both separate science and combined science students unless indicated in the question

**Q1.**

This question is about elements, compounds and mixtures.

- (a) Substance **A** contains only one type of atom.

Substance **A** does **not** conduct electricity.

Which type of substance is **A**?

Tick (✓) **one** box.

Compound

Metallic element

Mixture

Non-metallic element

(1)

- (b) Substance **B** contains two types of atoms.

The atoms are chemically combined together in fixed proportions.

Which type of substance is **B**?

Tick (✓) **one** box.

Compound

Metallic element

Mixture

Non-metallic element

(1)

- (c) What is the name of the elements in Group 0 of the periodic table?

Tick (✓) **one** box.

- Alkali metals
- Halogens
- Noble gases
- Transition metals

(1)

(d) Which statement about the elements in Group 0 is correct?

Tick (✓) **one** box.

- All elements in the group are very reactive.
- All elements in the group form negative ions.
- The boiling points increase down the group.
- The relative atomic masses ( $A_r$ ) decrease down the group.

(1)

(e) Neon is in Group 0.

What type of particles are in a sample of neon?

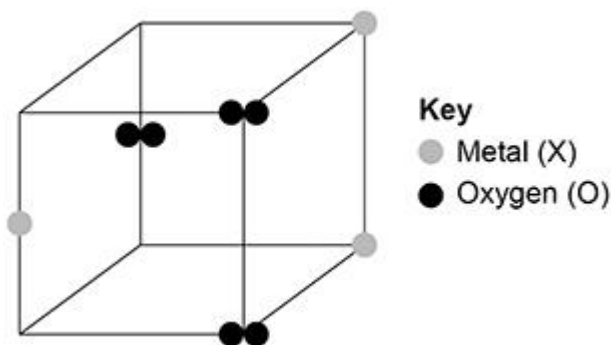
Tick (✓) **one** box.

- Atoms
- Ions
- Molecules

(1)

(f) **Figure 1** represents part of the structure of an oxide of a metal.

**Figure 1**



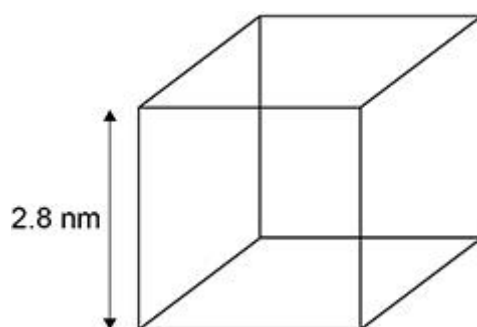
Determine the empirical formula of this oxide.

Empirical formula = XO\_\_\_\_\_ (1)

A nanoparticle of a metallic element is a cube.

**Figure 2** shows a diagram of the nanoparticle.

**Figure 2**



(g) The surface area of a cube is given by the equation:

$$\text{surface area} = (\text{length of side})^2 \times 6$$

Calculate the surface area of the cube in **Figure 2**.

Give your answer to 2 significant figures. **(separate only)**

---



---



---



---



---



---



---



---

Surface area (2 significant figures) = \_\_\_\_\_ nm<sup>2</sup>

(3)

- (h) Fine and coarse particles of the metallic element are also cubes.

The length of a fine particle cube is 10 times smaller than the length of a coarse particle cube.

How does the surface area to volume ratio of the fine particle cube compare with that of the coarse particle cube?

Tick (✓) **one** box. **(separate only)**

Both surface area to volume ratios are the same.

The surface area to volume ratio of the fine particle is 10 times greater.

The surface area to volume ratio of the fine particle is 10 times smaller.

(1)

(Total 10 marks)

**Q2.**

This question is about Group 1 elements.

- (a) Complete **Table 1** to show the electronic structure of a potassium atom.

**Table 1**

Atom	Number of electrons	Electronic structure
Sodium	11	2,8,1
Potassium	19	

(1)

- (b) Why do Group 1 elements have similar chemical properties?

Tick (✓) **one** box.

They have the same number of electron shells.

They have the same number of outer shell electrons.

They have two electrons in the first shell.

(1)

(c) What is the type of bonding in sodium?

Tick (✓) **one** box.

Covalent

Ionic

Metallic

(1)

**Table 2** shows observations made when lithium, potassium and rubidium react with water.

**Table 2**

Element	Observations
Lithium	Bubbles slowly Floats Moves slowly
Sodium	1 _____ 2 _____
Potassium	Bubbles very quickly Melts into a ball Floats Moves very quickly Flame
Rubidium	Sinks Melts into a ball Explodes with a flame

(d) Give **two** observations you could make when sodium reacts with water.Write your answers in **Table 2**.

(2)

(e) How does the reactivity of the elements change going down Group 1?

---



---

(1)

- (f) Give **two** ways in which the observations in **Table 2** show the change in reactivity going down Group 1.

1 \_\_\_\_\_

2 \_\_\_\_\_

(2)

- (g) Which gas is produced when Group 1 elements react with water?

Tick (✓) **one** box.

Carbon dioxide

Hydrogen

Nitrogen

Oxygen

(1)

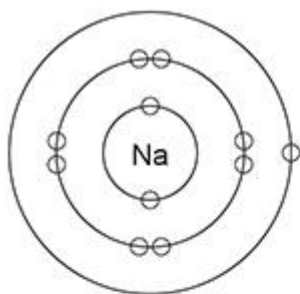
- (h) Sodium fluoride is an ionic compound.

The diagram below shows dot and cross diagrams for a sodium atom and a fluorine atom.

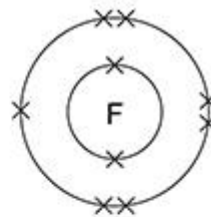
Complete the diagram below to show what happens when a sodium atom and a fluorine atom react to produce sodium fluoride.

You should:

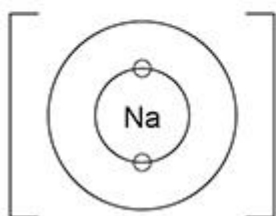
- complete the electronic structures of the sodium ion and the fluoride ion
- give the charges on the sodium ion and the fluoride ion.



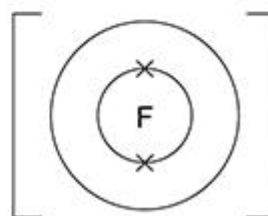
Sodium atom



Fluorine atom



Sodium ion



Fluoride ion

(3)  
(Total 12 marks)

**Q3.**

This question is about atomic structure and the periodic table.

Gallium (Ga) is an element that has two isotopes.

- (a) Give the meaning of 'isotopes'.

You should answer in terms of subatomic particles.

---



---



---



---

(2)

- (b) The table below shows the mass numbers and percentage abundances of the isotopes of gallium.

Mass	Percentage abundance
------	----------------------

number	(%)
69	60
71	40

Calculate the relative atomic mass ( $A_r$ ) of gallium.

Give your answer to 1 decimal place.

---

---

---

---

Relative atomic mass (1 decimal place) = \_\_\_\_\_

(2)

Gallium (Ga) is in Group 3 of the modern periodic table.

(c) Give the numbers of electrons and neutrons in an atom of the isotope  ${}^{69}_{31}\text{Ga}$

Number of electrons \_\_\_\_\_

Number of neutrons \_\_\_\_\_

(2)

(d) What is the most likely formula of a gallium ion?

Tick (✓) **one** box.

$\text{Ga}^+$

$\text{Ga}^-$

$\text{Ga}^{3+}$

$\text{Ga}^{3-}$

(1)

(e) Gallium was discovered six years after Mendeleev published his periodic table.

Give **two** reasons why the discovery of gallium helped Mendeleev's periodic table to become accepted.



1 \_\_\_\_\_

2 \_\_\_\_\_

(2)

(Total 9 marks)

#### Q4.

This question is about Group 1 elements.

- (a) Give **two** observations you could make when a small piece of potassium is added to water.

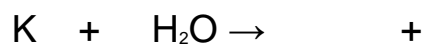
1 \_\_\_\_\_

2 \_\_\_\_\_

(2)

- (b) Complete the equation for the reaction of potassium with water.

You should balance the equation.



(2)

- (c) Explain why the reactivity of elements changes going down Group 1.

\_\_\_\_\_

\_\_\_\_\_

\_\_\_\_\_

\_\_\_\_\_

\_\_\_\_\_

\_\_\_\_\_

\_\_\_\_\_

\_\_\_\_\_

\_\_\_\_\_

(4)

Sodium reacts with oxygen to produce the ionic compound sodium oxide.

Oxygen is a Group 6 element.

- (d) Draw a dot and cross diagram to show what happens when atoms of sodium and oxygen react to produce sodium oxide.

**Diagram**

**(4)**

- (e) Why is oxygen described as being reduced in the reaction between sodium and oxygen?

---

---

**(1)**

- (f) Explain why sodium oxide has a high melting point.

---

---

---

---

---

---

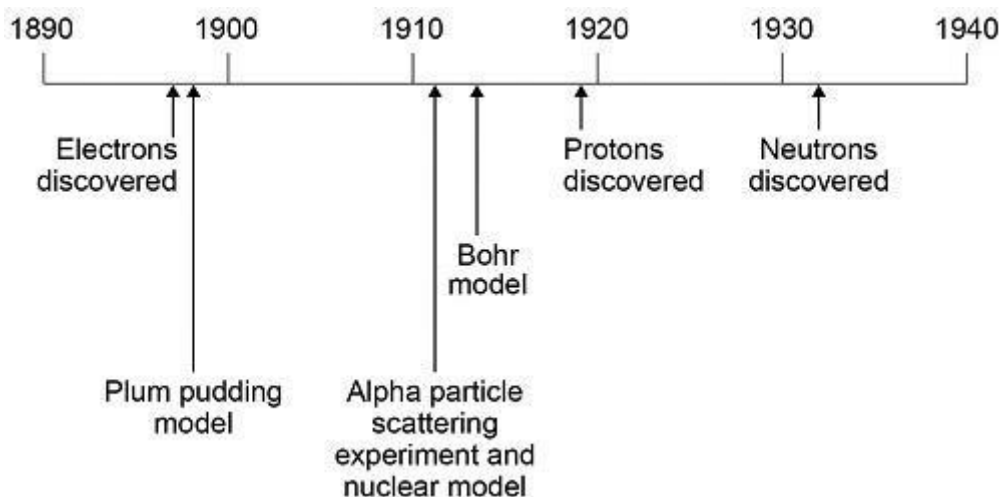
**(3)**

**(Total 16 marks)**

**Q5.**

This question is about the development of scientific theories.

The diagram below shows a timeline of some important steps in the development of the model of the atom.



(a) The plum pudding model did not have a nucleus.

Describe **three** other differences between the nuclear model of the atom and the plum pudding model.

1 \_\_\_\_\_

\_\_\_\_\_

\_\_\_\_\_

2 \_\_\_\_\_

\_\_\_\_\_

\_\_\_\_\_

3 \_\_\_\_\_

\_\_\_\_\_

\_\_\_\_\_

(3)

(b) Niels Bohr adapted the nuclear model.

Describe the change that Bohr made to the nuclear model.

\_\_\_\_\_

\_\_\_\_\_

\_\_\_\_\_

\_\_\_\_\_

(2)

(c) Mendeleev published his periodic table in 1869.

Mendeleev arranged the elements in order of atomic weight.

Mendeleev then reversed the order of some pairs of elements.

A student suggested Mendeleev's reason for reversing the order was to arrange the elements in order of atomic number.

Explain why the student's suggestion **cannot** be correct.

Use the diagram above.

---

---

---

---

(2)

- (d) Give the correct reason why Mendeleev reversed the order of some pairs of elements.

---

---

(1)

(Total 8 marks)

### Q6.

This question is about the elements in Group 7 of the periodic table.

**Table 1** shows the melting points and boiling points of some of the elements.

**Table 1**

Element	Melting point in °C	Boiling point in °C
Fluorine	-220	-188
Chlorine	-101	-35
Bromine	-7	59

- (a) What is the state of bromine at 100 °C?

Use **Table 1**.

Tick (✓) **one** box.

Gas

Liquid

Solid

(1)

(b) What temperature does chlorine gas condense at to form a liquid?

Use **Table 1**.

Temperature = \_\_\_\_\_ °C

(1)

(c) Complete the sentences.

Going down Group 7 the melting points \_\_\_\_\_ .

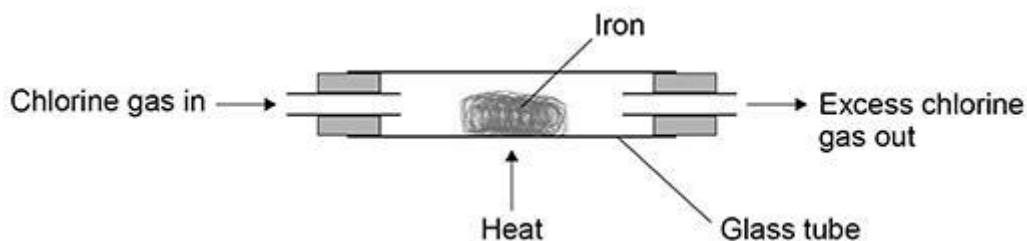
This is because the size of the molecules increases so the intermolecular forces

\_\_\_\_\_ .

(2)

A teacher investigated the reaction of iron with chlorine.

The diagram below shows the apparatus used.



(d) Why did the teacher do the investigation in a fume cupboard?

Tick (✓) **one** box.

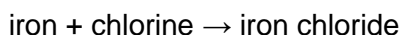
Chlorine gas is coloured.

Chlorine gas is flammable.

Chlorine gas is toxic.

(1)

(e) The word equation for the reaction is:



Iron chloride is a solid.

The teacher weighed the glass tube and contents:

- before the reaction
- after the reaction.

What happened to the mass of the glass tube and contents during the reaction?

Give **one** reason for your answer.

The mass of the glass tube and contents \_\_\_\_\_

Reason \_\_\_\_\_

\_\_\_\_\_

(2)

The teacher repeated the investigation with bromine gas and with iodine gas.

**Table 2** shows the results.

**Table 2**

Element	Observation
Chlorine	Iron burns vigorously with an orange glow
Bromine	Iron burns with an orange glow
Iodine	Iron slowly turns darker

- (f) Fluorine is above chlorine in Group 7.

Predict what you would observe when fluorine gas reacts with iron.

Use **Table 2**.

\_\_\_\_\_

\_\_\_\_\_

(1)

- (g) Balance the equation for the reaction between iron and bromine.



(1)

- (h) Calculate the relative formula mass ( $M_r$ ) of  $\text{FeBr}_3$

Relative atomic masses ( $A_r$ ): Fe = 56 Br = 80

---

---

Relative formula mass ( $M_r$ ) = \_\_\_\_\_

(2)

(Total 11 marks)

**Q7.**

This question is about the halogens.

**Table 1** shows the melting points and boiling points of some halogens.

**Table 1**

Element	Melting point in °C	Boiling point in °C
Fluorine	-220	-188
Chlorine	-101	-35
Bromine	-7	59

(a) What is the state of bromine at 0 °C **and** at 100 °C?

Tick (✓) **one** box.

**State at 0 °C**

**State at 100 °C**

Gas

Gas

Gas

Liquid

Liquid

Gas

Liquid

Liquid

Solid

Gas

Solid

Liquid

(1)

(b) Explain the trend in boiling points of the halogens shown in **Table 1**.

---

---

---

---

---

---

---

---

---

(4)

- (c) Why is it **not** correct to say that the boiling point of a single bromine molecule is 59 °C?

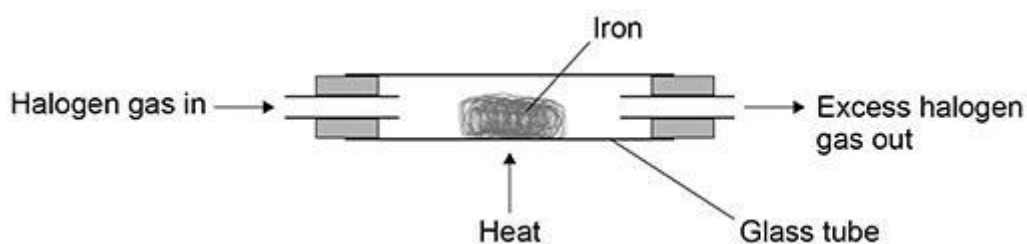
---

---

(1)

Iron reacts with each of the halogens in their gaseous form.

The diagram below shows the apparatus used.



- (d) Give **one** reason why this experiment should be done in a fume cupboard.

---

---

(1)

- (e) Explain why the reactivity of the halogens decreases going down the group.

---

---

---

---

---

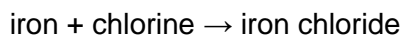
---



(3)

- (f) A teacher investigated the reaction of iron with chlorine using the apparatus in the above diagram.

The word equation for the reaction is:



The teacher weighed:

- the glass tube
- the glass tube and iron before the reaction
- the glass tube and iron chloride after the reaction.

**Table 2** shows the teacher's results.

**Table 2**

	Mass in g
Glass tube	51.56
Glass tube and iron	56.04
Glass tube and iron chloride	64.56

Calculate the simplest whole number ratio of:

moles of iron atoms : moles of chlorine atoms

Determine the balanced equation for the reaction.

Relative atomic masses ( $A_r$ ): Cl = 35.5 Fe = 56

---



---



---



---



---



---

Moles of iron atoms : moles of chlorine atoms = \_\_\_\_\_ : \_\_\_\_\_

Equation for the reaction \_\_\_\_\_

(6)

(Total 16 marks)

**Q8.**

This question is about the periodic table.

In the 19th century, some scientists tried to classify the elements by arranging them in order of their atomic weights.

The figure below shows the periodic table Mendeleev produced in 1869.

His periodic table was more widely accepted than previous versions.

	Group 1	Group 2	Group 3	Group 4	Group 5	Group 6	Group 7
Period 1	H						
Period 2	Li	Be	B	C	N	O	F
Period 3	Na	Mg	Al	Si	P	S	Cl
Period 4	K Cu	Ca Zn	* *	Ti *	V As	Cr Se	Mn Br
Period 5	Rb Ag	Sr Cd	Y In	Zr Sn	Nb Sb	Mo Te	* I

- (a) The atomic weight of tellurium (Te) is 128 and that of iodine (I) is 127

Why did Mendeleev reverse the order of these two elements?

---



---

(1)

- (b) Mendeleev left spaces marked with an asterisk \*

He left these spaces because he thought missing elements belonged there.

Why did Mendeleev's periodic table become more widely accepted than previous versions?

---



---



---



---



---



---

(3)

(c) Mendeleev arranged the elements in order of their atomic weight.

What is the modern name for atomic weight?

Tick (✓) **one** box.

Atomic number

Mass number

Relative atomic mass

Relative formula mass

(1)

(d) Complete the sentence.

In the modern periodic table, the elements are arranged in order of

\_\_\_\_\_

(1)

Chlorine, iodine and astatine are in Group 7 of the modern periodic table.

(e) Astatine (At) is below iodine in Group 7.

Predict:

- the formula of an astatine molecule
- the state of astatine at room temperature.

Formula of astatine molecule \_\_\_\_\_

State at room temperature \_\_\_\_\_

(2)

(f) Sodium is in Group 1 of the modern periodic table.

Describe what you would see when sodium reacts with chlorine.

\_\_\_\_\_  
\_\_\_\_\_  
\_\_\_\_\_  
\_\_\_\_\_

(2)

(Total 10 marks)

**Q9.**

The halogens are elements in Group 7.

- (a) Bromine is in Group 7.

Give the number of electrons in the outer shell of a bromine atom.

\_\_\_\_\_ (1)

- (b) Bromine reacts with hydrogen. The gas hydrogen bromide is produced.

What is the structure of hydrogen bromide?

Tick **one** box.

- |                    |                          |
|--------------------|--------------------------|
| Giant covalent     | <input type="checkbox"/> |
| Ionic lattice      | <input type="checkbox"/> |
| Metallic structure | <input type="checkbox"/> |
| Small molecule     | <input type="checkbox"/> |

(1)

- (c) What is the formula for fluorine gas?

Tick **one** box.

- |                |                          |
|----------------|--------------------------|
| F              | <input type="checkbox"/> |
| F <sub>2</sub> | <input type="checkbox"/> |
| F <sup>2</sup> | <input type="checkbox"/> |
| 2F             | <input type="checkbox"/> |

(1)

A student mixes solutions of halogens with solutions of their salts.

The table below shows the student's observations.

	Potassium chloride (colourless)	Potassium bromide (colourless)	Potassium iodide (colourless)
Chlorine (colourless)		Solution turns orange	Solution turns brown
Bromine (orange)	No change		Solution turns brown
Iodine (brown)	No change	No change	

(d) Explain how the reactivity of the halogens changes going down Group 7.

Use the results in the table above.

---



---



---



---



---



---

(3)

A company uses chlorine to produce titanium chloride from titanium dioxide.

(e) What is the relative formula mass ( $M_r$ ) of titanium dioxide,  $TiO_2$ ?

Relative atomic masses ( $A_r$ ): O = 16 Ti = 48

Tick **one** box.

64	<input type="checkbox"/>
80	<input type="checkbox"/>
128	<input type="checkbox"/>
768	<input type="checkbox"/>

(1)

(f) The company calculates that 500 g of titanium dioxide should produce 1.2 kg of titanium chloride.

However, the company finds that 500 g of titanium dioxide only produces 900 g of titanium chloride.

Calculate the percentage yield.

---

---

---

---

Percentage yield = \_\_\_\_\_ %

(2)

(Total 9 marks)

### Q10.

This question is about elements in Group 1.

A teacher burns sodium in oxygen.

- (a) Complete the word equation for the reaction.

sodium + oxygen → \_\_\_\_\_

(1)

- (b) What is the name of this type of reaction?

Tick **one** box.

Decomposition

Electrolysis

Oxidation

Precipitation

(1)

- (c) The teacher dissolves the product of the reaction in water and adds universal indicator.

The universal indicator turns purple.

What is the pH value of the solution?

Tick **one** box.

1		4		7		13	
---	--	---	--	---	--	----	--

(1)

- (d) The solution contains a substance with the formula NaOH

Give the name of the substance.

\_\_\_\_\_

(1)

- (e) All alkalis contain the same ion.

What is the formula of this ion?

Tick **one** box.

H <sup>+</sup>	<input type="checkbox"/>
Na <sup>+</sup>	<input type="checkbox"/>
OH <sup>-</sup>	<input type="checkbox"/>
O <sup>2-</sup>	<input type="checkbox"/>

(1)

- (f) A solution of NaOH had a concentration of 40 g/dm
- <sup>3</sup>

What mass of NaOH would there be in 250 cm<sup>3</sup> of the solution?

\_\_\_\_\_

\_\_\_\_\_

\_\_\_\_\_

\_\_\_\_\_

Mass = \_\_\_\_\_ g

(2)

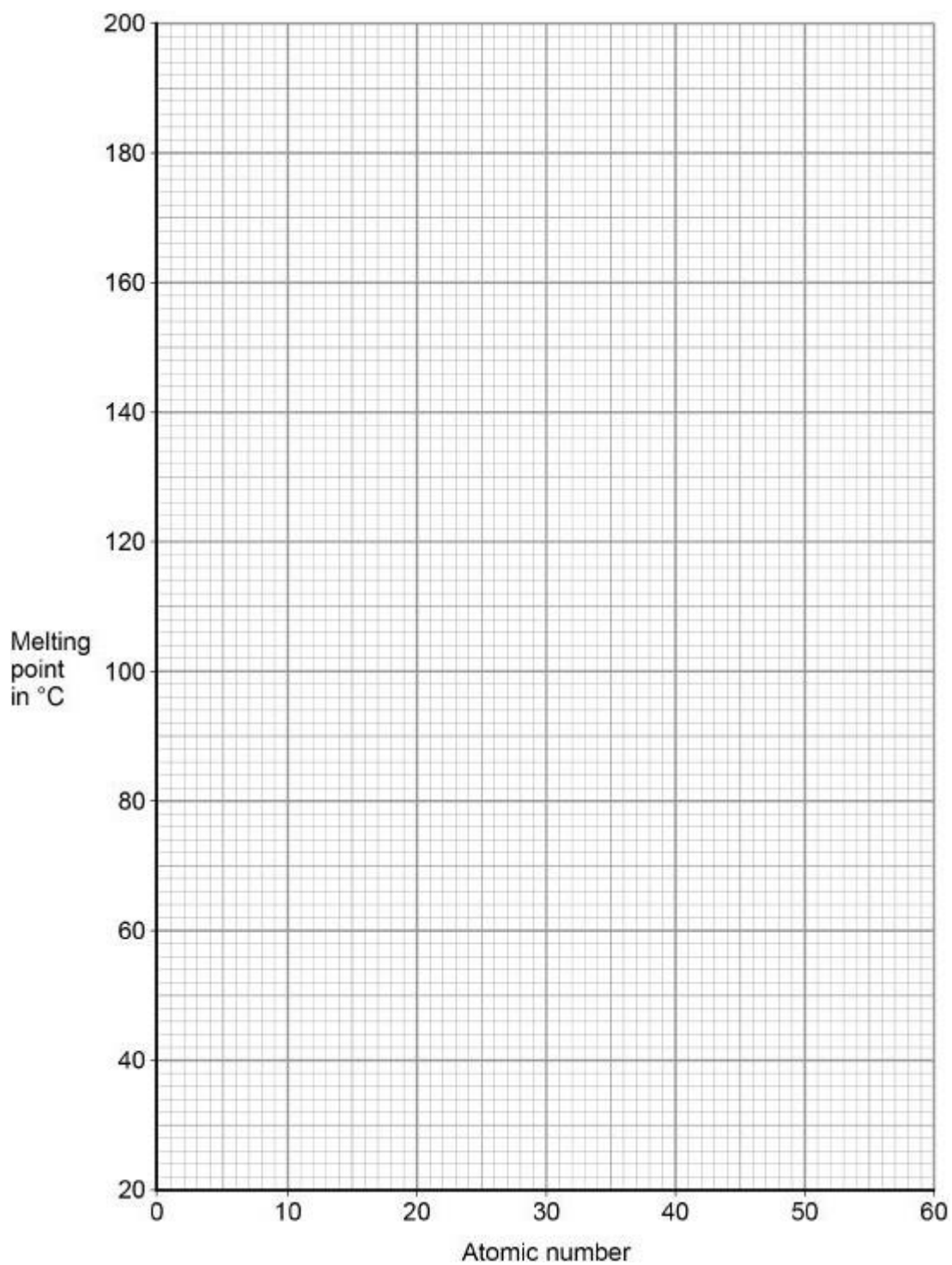
- (g) The melting points of the elements in Group 1 show a trend.

The table below shows the atomic numbers and melting points of the Group 1 elements.

Element	Atomic number	Melting point in °C
---------	---------------	---------------------

Lithium	3	181
Sodium	11	98
Potassium	19	63
Rubidium	37	X
Caesium	55	29

Plot the data from the table on the graph below.





(2)

- (h) Predict the melting point,
- X**
- , of rubidium, atomic number 37

Use the graph above.

Melting point = \_\_\_\_\_ °C

(1)

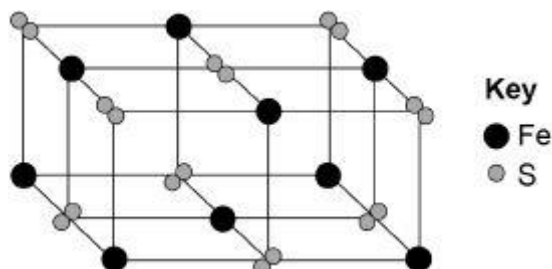
(Total 10 marks)

**Q11.**

This question is about metals and metal compounds.

- (a) Iron pyrites is an ionic compound.

The diagram below shows a structure for iron pyrites.



Determine the formula of iron pyrites.

Use the diagram above.

\_\_\_\_\_

(1)

- (b) An atom of iron is represented as
- ${}^{56}_{26}\text{Fe}$

Give the number of protons, neutrons and electrons in this atom of iron.

Number of protons \_\_\_\_\_

Number of neutrons \_\_\_\_\_

Number of electrons \_\_\_\_\_

(3)

- (c) Iron is a transition metal.

Sodium is a Group 1 metal.

Give **two** differences between the properties of iron and sodium. **(separate only)**

1. \_\_\_\_\_

2. \_\_\_\_\_  
\_\_\_\_\_

(2)

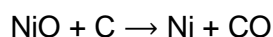
Nickel is extracted from nickel oxide by reduction with carbon.

(d) Explain why carbon can be used to extract nickel from nickel oxide.

\_\_\_\_\_  
\_\_\_\_\_  
\_\_\_\_\_  
\_\_\_\_\_

(2)

(e) An equation for the reaction is:



Calculate the percentage atom economy for the reaction to produce nickel.

Relative atomic masses ( $A_r$ ): C = 12 Ni = 59

Relative formula mass ( $M_r$ ): NiO = 75

Give your answer to 3 significant figures. **(separate only)**

\_\_\_\_\_  
\_\_\_\_\_  
\_\_\_\_\_  
\_\_\_\_\_  
\_\_\_\_\_  
\_\_\_\_\_

Percentage atom economy = \_\_\_\_\_ %

(3)

**(Total 11 marks)**

### Q12.

This question is about Group 7 elements.

Chlorine is more reactive than iodine.

(a) Name the products formed when chlorine solution reacts with potassium

iodide solution.

---

---

(1)

(b) Explain why chlorine is more reactive than iodine.

---

---

---

---

---

---

---

(3)

(c) Chlorine reacts with hydrogen to form hydrogen chloride.

Explain why hydrogen chloride is a gas at room temperature.

Answer in terms of structure and bonding.

---

---

---

---

---

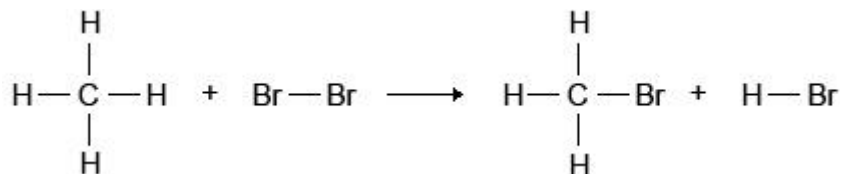
---

---

(3)

(d) Bromine reacts with methane in sunlight.

The diagram below shows the displayed formulae for the reaction of bromine with methane.



The table below shows the bond energies and the overall energy change in the reaction.

	C—H	Br—Br	C—Br	H—Br	Overall energy change
Energy in kJ/mol	412	193	X	366	-51

Calculate the bond energy **X** for the C—Br bond.

Use the diagram and the table above.

---



---



---



---



---



---



---

Bond energy **X** = \_\_\_\_\_ kJ/mol

(4)

(Total 11 marks)

**Q13.**

**Figure 1** shows an outline of the modern periodic table.

**Figure 1**

The diagram shows an outline of the periodic table with the following elements marked:

- J**: Located in the second period, second group (Helium group).
- L**: Located in the second period, first group (Lithium group).
- M**: Located in the third period, eighth group (Transition metals).
- Q**: Located in the third period, seventh group (Halogens).
- R**: Located in the fourth period, first group (Alkali metals).

**J, L, M, Q** and **R** represent elements in the periodic table.

(a) Which element has four electrons in its outer shell?

Tick (✓) **one** box.

J     L     M     Q     R

(1)

- (b) Which
- two**
- elements in
- Figure 1**
- are in the same period?

\_\_\_\_\_ and \_\_\_\_\_

(1)

- (c) Which element reacts with potassium to form an ionic compound?

Tick (✓) **one** box.J  L  M  Q  R 

(1)

- (d) Which element forms ions with different charges?

Tick (✓) **one** box.J  L  M  Q  R 

(1)

- (e) Which element has three electron shells?

Tick (✓) **one** box.J  L  M  Q  R 

(1)

- (f) In the 1860s scientists were trying to organise elements.

**Figure 2** shows the table published by John Newlands in 1865.

The elements are arranged in order of their atomic weights.

**Figure 2**

H	Li	Be	B	C	N	O
F	Na	Mg	Al	Si	P	S
Cl	K	Ca	Cr	Ti	Mn	Fe
Co,Ni	Cu	Zn	Y	In	As	Se
Br	Rb	Sr	Ce,La	Zr	Di,Mo	Ro,Ru
Pd	Ag	Cd	U	Sn	Sb	Te

**Figure 3** shows the periodic table published by Dmitri Mendeleev in 1869.

**Figure 3**

H																
Li	Be	B	C	N	O	F										
Na	Mg	Al	Si	P	S	Cl										
K	Cu	Ca	Zn	?	?	Ti	?	V	As	Cr	Se	Mn	Br	Fe	Co	Ni
Rb	Ag	Sr	Cd	Y	In	Zr	Sn	Nb	Sb	Mo	Te	?	I	Ru	Rh	Pd

Mendeleev's table became accepted by other scientists whereas Newlands' table was not.

Evaluate Newlands' and Mendeleev's tables.

You should include:

- a comparison of the tables
- reasons why Mendeleev's table was more acceptable.

Use **Figure 2** and **Figure 3** and your own knowledge.

(6)

(Total 11 marks)

#### Q14.

This question is about halogens and their compounds.

The table below shows the boiling points and properties of some of the elements in Group 7 of the periodic table.

Element	Boiling point in °C	Colour in aqueous solution
Fluorine	-188	colourless
Chlorine	-35	pale green
Bromine	X	orange
Iodine	184	brown

(a) Why does iodine have a higher boiling point than chlorine?

Tick **one** box.

Iodine is ionic and chlorine is covalent

Iodine is less reactive than chlorine

The covalent bonds between iodine atoms are stronger

The forces between iodine molecules are stronger

(1)


- (b) Predict the boiling point of bromine.

---

(1)

- (c) A redox reaction takes place when aqueous chlorine is added to potassium iodide solution.

The equation for this reaction is:



Look at table above.

What is the colour of the final solution in this reaction?

Tick **one** box.

Brown

Orange

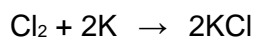
Pale green

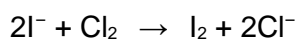
Colourless

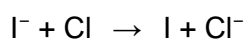
(1)

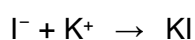
- (d) What is the ionic equation for the reaction of chlorine with potassium iodide?

Tick **one** box.









(1)

(e) Why does potassium iodide solution conduct electricity?

Tick **one** box.

It contains a metal

It contains electrons which can move

It contains ions which can move

It contains water

(1)

(f) What are the products of electrolysis of potassium iodide solution?

Tick **one** box.**Product at cathode****Product at anode**

hydrogen

iodine

hydrogen

oxygen

potassium

iodine

potassium

oxygen

(1)

(Total 6 marks)

**Q15.**

This question is about elements and the periodic table.

(a) Use the correct answers from the box to complete the sentences.

<b>atoms</b>	<b>atomic weights</b>	<b>electrons</b>	<b>proton numbers</b>
--------------	-----------------------	------------------	-----------------------

Newlands' and Mendeleev's periodic tables show the elements in order of their \_\_\_\_\_ .

Following the discovery of protons and \_\_\_\_\_, the modern periodic

table shows the elements in order of their \_\_\_\_\_ .

(3)



- (b) **Figure 1** shows the position of six elements in the modern periodic table.

**Figure 1**

							H								
Li															
Na															
K							Fe								
Rb															

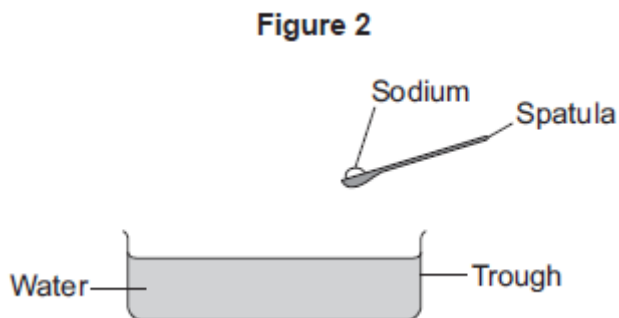
- (i) Which **one** of these six elements has the lowest boiling point?
- \_\_\_\_\_ (1)

- (ii) Complete the sentence.
- In the periodic table, rubidium (Rb) is in Group \_\_\_\_\_ . (1)

- (iii) Which of these three elements is the most reactive?
- Tick (✓) **one** box.
- |               |                          |
|---------------|--------------------------|
| Lithium (Li)  | <input type="checkbox"/> |
| Sodium (Na)   | <input type="checkbox"/> |
| Potassium (K) | <input type="checkbox"/> |
- (1)

- (iv) Which **two** statements are correct?
- Tick (✓) **two** boxes.
- |  |                          |
|--|--------------------------|
| Iron has a higher density than potassium.    | <input type="checkbox"/> |
| Iron is softer than potassium.               | <input type="checkbox"/> |
| Iron reacts vigorously with water.           | <input type="checkbox"/> |
| Iron forms ions that have different charges. | <input type="checkbox"/> |
- (2)

- (c) **Figure 2** shows sodium being put into water.



Describe **three** observations that can be seen when sodium is put into water.

1.

---



---

2.

---



---

3.

---



---

(3)

(Total 11 marks)

### Q16.

This question is about elements and the periodic table.

(a) Newlands and Mendeleev both produced early versions of the periodic table.

(i) Complete the sentence.

In their periodic tables, Newlands and Mendeleev arranged the elements in

order of \_\_\_\_\_.

(1)

(ii) Name the particle that allowed the elements to be arranged in order of their atomic number in the modern periodic table.

\_\_\_\_\_

(1)

(b) The diagram below shows the position of nine elements in the modern periodic table.

Li																			
Na																			
K										Cu									
Rb																			

- (i) Which **one** of the nine elements shown in the diagram above has the lowest boiling point?

\_\_\_\_\_

(1)

- (ii) Copper and potassium have different melting points and boiling points.  
Give **one other** difference between the properties of copper and potassium.

\_\_\_\_\_  
\_\_\_\_\_

(1)

- (iii) Explain why the reactivity of the elements increases going down Group 1 from lithium to rubidium but decreases going down Group 7 from fluorine to iodine.

\_\_\_\_\_  
\_\_\_\_\_  
\_\_\_\_\_  
\_\_\_\_\_  
\_\_\_\_\_  
\_\_\_\_\_  
\_\_\_\_\_  
\_\_\_\_\_  
\_\_\_\_\_  
\_\_\_\_\_  
\_\_\_\_\_  
\_\_\_\_\_  
\_\_\_\_\_  
\_\_\_\_\_  
\_\_\_\_\_

(4)

**(Total 8 marks)**